

RYERSON UNIVERSITY
DEPARTMENT OF COMPUTER SCIENCE

CPS 420
MIDTERM 1
WINTER 2017

NAME: _____

STUDENT ID: _____

INSTRUCTIONS

- This exam is 110 minutes long.
- This exam is out of 60 and is worth 15% of the course mark.
- This is a closed book exam. However, one double-sided letter-sized crib sheet is allowed.
- This exam is single-sided and has 5 pages including this front page.
- Please answer all questions directly on this exam.

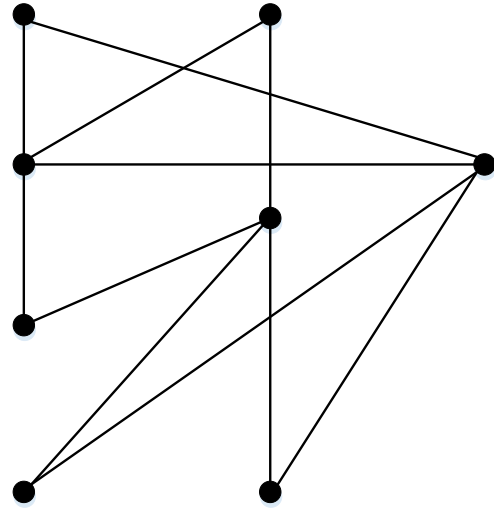
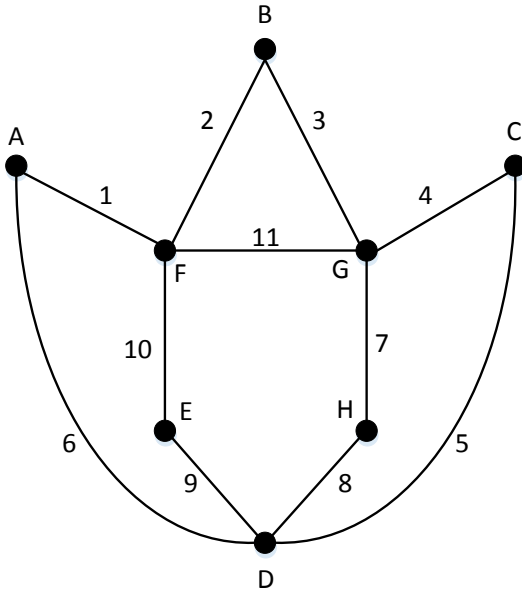
For Grading Purposes

A1-2	/10
A3-5	/20
B	/10
C	/20

PART A – GRAPH THEORY – 30 MARKS

1. Equivalent Graphs (4 marks)

Label the vertices from A to H and edges from 1 to 11 of the graph on the right to show that it is equivalent to the graph on the left



2. Graph Degrees (6 marks)

For each of the following questions, either draw a graph with the requested properties, or explain **convincingly** (possibly by quoting a theorem) why such a graph cannot be drawn.

a) A graph with 5 vertices of degrees 5, 5, 4, 4, 3

b) A graph with 5 vertices of degrees 5, 5, 4, 4, 4



3. Acquaintance Graphs (8 marks)

Suppose that in a group of 6 people A, B, C, D, E, and F the following pairs of people are acquainted with each other: A and B, B and D, A and D, A and F, C and D, C and E, C and F.

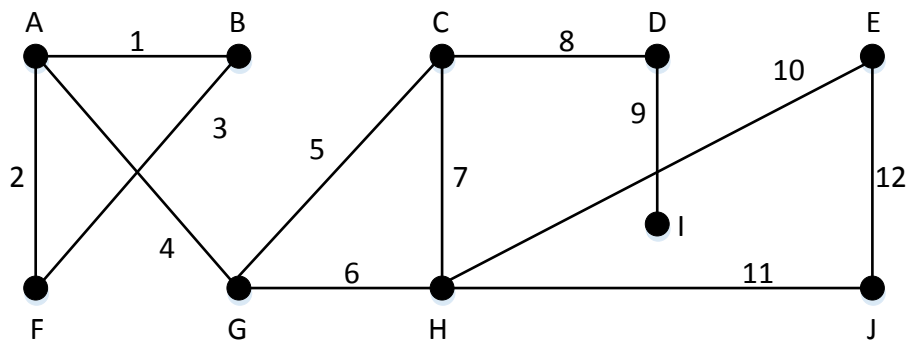
a) Draw a graph G to represent who is acquainted with whom

b) Draw a graph H to represent who is **not** acquainted with whom

c) What is $G \cup H$?

4. Connected Components (8 marks)

This question and the next one are based on this graph:



a) An edge of a graph whose removal disconnects the graph of which it is a part is called a “bridge”. List all the bridges of the graph above.

b) If you were to remove all the bridges that you listed in part a) from the graph, how many connected components would this graph have? List them.

5. Walks (4 marks)

For each of the 4 walks in the graph in question 4, Indicate with True or False in the table below whether the walks in the graph in question 4 have each of the properties

Walk:	A1B3F2A4G	H6G5C7H11J12E10H	C8D8C7H6G5C	I9D8C5G4A
Path/Trail				
(Simple) path				
Closed walk				
Circuit				
Simple circuit				

PART B – SEQUENCES AND RECURRENCE RELATIONS – 10 MARKS

Given the sequence a_n defined with the recurrence relation:

$$a_1 = 1$$

$$a_n = a_{n-1} + n + 1 \quad \text{for } n > 1$$

1. Terms of a Sequence (5 marks)

Calculate a_2, a_3, a_4, a_5, a_6

Keep your intermediate answers as you will need them in the next question.

2. Iteration (5 marks)

Using iteration, solve the recurrence relation when $n \geq 1$ (i.e. find an analytic formula for a_n).

Simplify your answer as much as possible, showing your work. In particular, your final answer should not contain sums and products.

PART C – INDUCTION – 20 MARKS

Prove by induction that for all positive integers n , $\sum_{i=2}^n i(i-1) = \frac{n(n-1)(n+1)}{3}$

No other method is acceptable.

Be sure to lay out your proof clearly and correctly and to justify every step.